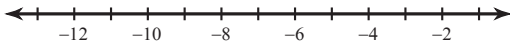


Assignment

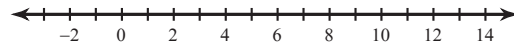
© 2013 Kuta Software LLC. All rights reserved.

Solve each compound inequality and graph its solution.

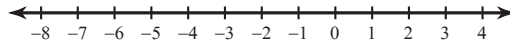
1) $-10 - 10v \leq 40$ or $4 + 8v \geq -4$



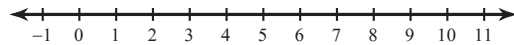
2) $10 - 4m \leq 10$ and $-9m + 10 > -89$



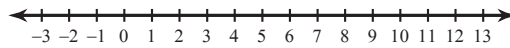
3) $137 \leq 12a - 7 < -43$



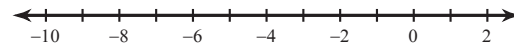
4) $-12 < 9x - 12 \leq 24$



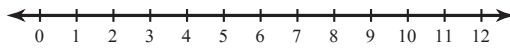
5) $-9 \leq 8r + 7 < 87$



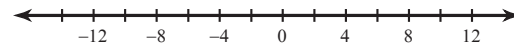
6) $-6p + 11 < 59$ and $-6p + 6 \geq 36$



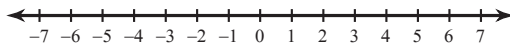
7) $8x + 2 \leq 66$ and $12 + 2x > 18$



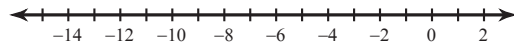
8) $6n - 11 > 37$ or $2n + 11 < -13$



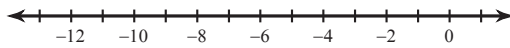
9) $9v - 3 \geq -39$ and $4v + 9 < 33$



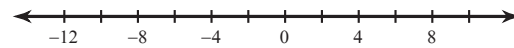
10) $-12x + 8 \geq 128$ or $3x - 3 \geq -6$



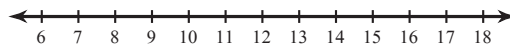
11) $3k - 4 \leq -28$ or $4 - 8k \leq 36$



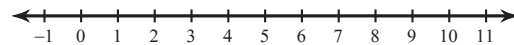
12) $4 - n > 14$ or $-2n + 9 \leq -3$



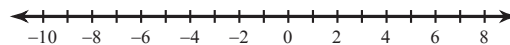
13) $5v - 1 < 54$ and $3v + 3 < 27$



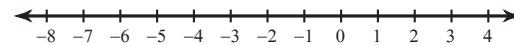
14) $12 + 8m \geq 52$ or $-4m + 11 \geq 3$



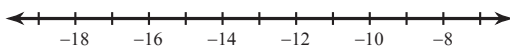
15) $6n - 8 > 22$ or $8n + 6 < -34$



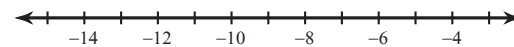
16) $6 - 4b \leq 18$ or $12b + 8 < 128$



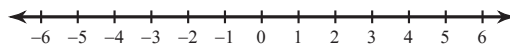
17) $7 + x \geq -5$ and $-9 + 3x < -36$



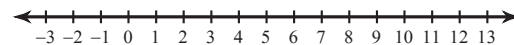
18) $10 - 9n > -26$ and $-1 - n \geq 7$



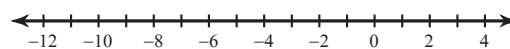
19) $4 \leq 4 - 6n < -20$



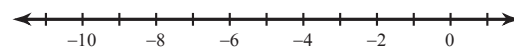
20) $7 - 6n \leq 19$ and $-4 - 8n \geq -92$



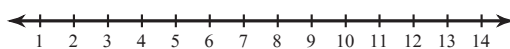
21) $9n + 7 \geq 7$ or $8 - 4n > 44$



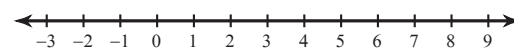
22) $-5b - 7 \geq 8$ and $10b - 2 \geq -62$



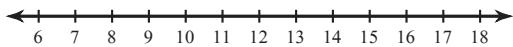
23) $4x - 4 < 20$ or $6x + 8 > 68$



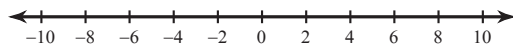
24) $10a + 6 > 56$ or $6a - 1 \leq 17$



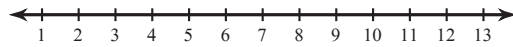
25) $2 + 6x \leq -4$ or $11x - 8 \leq 91$



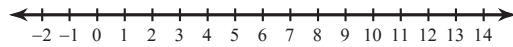
27) $-12 - 7b < -54$ or $7b + 3 < -32$



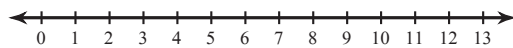
29) $-9 + 6p < 57$ and $3 + 3p > 12$



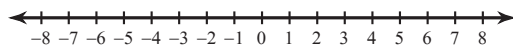
31) $8 + 9n < 26$ or $11 - 6n < -49$



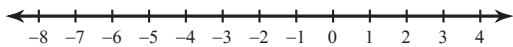
33) $-10 - 8n > -98$ and $11n + 1 > 23$



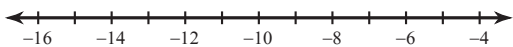
35) $-9a + 11 < -16$ or $-10a + 9 \geq 59$



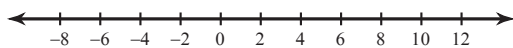
37) $107 < 11x + 8 \leq 85$



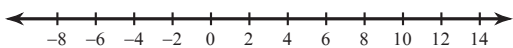
39) $6 + 9k > -84$ and $7 + 6k \leq -29$



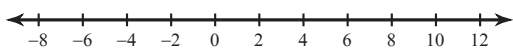
41) $-55 \leq 9a + 8 < 98$



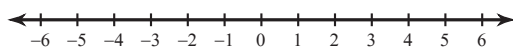
43) $7 - 2x < -13$ or $2 + 11x < -53$



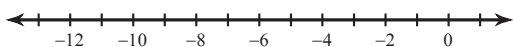
45) $9 + 12v \geq 105$ or $10v - 2 < -52$



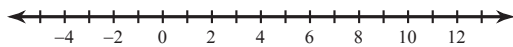
47) $-60 < 12r - 12 \leq 12$



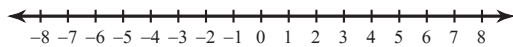
49) $11 - 5x < 21$ or $9x - 9 < -90$



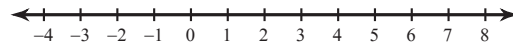
26) $-41 < -1 + 10x \leq 119$



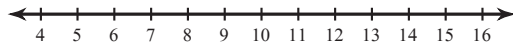
28) $6x - 12 > -84$ or $3 - 11x \geq -63$



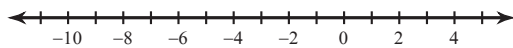
30) $3b - 7 < 11$ and $-12 - b \leq -11$



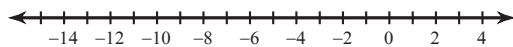
32) $-12k - 3 \geq 21$ or $12k - 5 \leq 103$



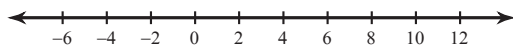
34) $-50 \leq 10 + 6k < 28$



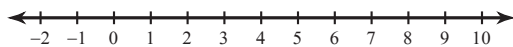
36) $4x + 1 \geq 1$ or $12x + 9 < -135$



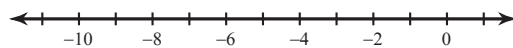
38) $-25 < 6x + 5 < 77$



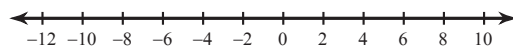
40) $-7x - 12 \leq -47$ or $7 + 10x < 47$



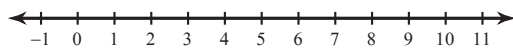
42) $p - 6 > -8$ or $-7p - 12 < 44$



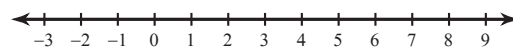
44) $2 - 7m \geq 58$ or $2 - 3m \leq -16$



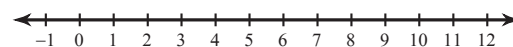
46) $23 \leq 6x + 11 \leq 59$



48) $4 - 5n \geq -11$ or $6 + 11n \leq 39$



50) $2 + r > 9$ or $7 + 7r \leq 21$

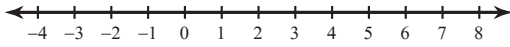


Assignment

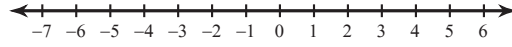
© 2013 Kuta Software LLC. All rights reserved.

Solve each compound inequality and graph its solution.

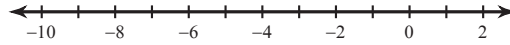
1) $2x - 7 \leq -3$ or $-9x - 2 < -38$



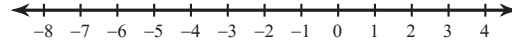
2) $34 \geq 4 - 5n \geq -16$



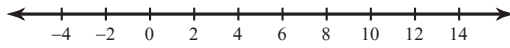
3) $-p + 4 \geq 10$ or $-3 - 11p < 19$



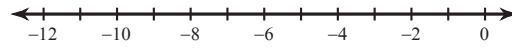
4) $10 + 5a \leq -50$ and $11a - 1 > -133$



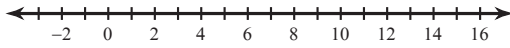
5) $-64 \leq -5b - 4 < 11$



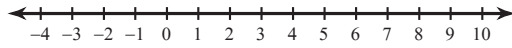
6) $10n - 3 \geq -63$ or $-7 + 9n < -70$



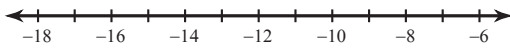
7) $5x - 4 < -4$ or $9x + 12 > 111$



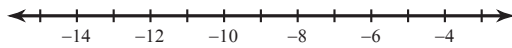
8) $11x - 12 > -34$ and $x + 7 \leq 14$



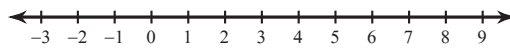
9) $-108 < 12 + 10k < -88$



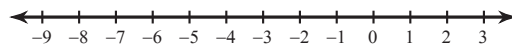
10) $-82 < 10x - 12 < -72$



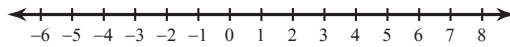
11) $-3n + 5 > -10$ and $3n - 3 > -3$



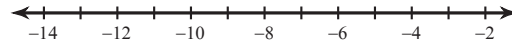
12) $-76 < 10n - 6 \leq 4$



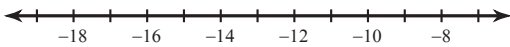
13) $10 - 2m > 12$ or $12m + 6 \geq 54$



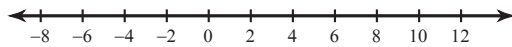
14) $3 - 4n \leq 51$ and $-5 + 11n \leq -126$



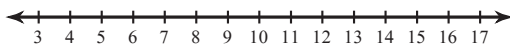
15) $6 + x \geq 18$ or $6 + 10x > -104$



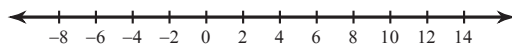
16) $48 > 5x - 2 \geq -27$



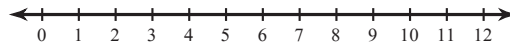
17) $3k + 3 > 39$ or $-2 + 5k \leq 33$



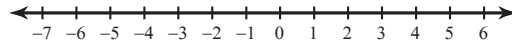
18) $-6x + 8 > 38$ or $11x + 7 > 128$



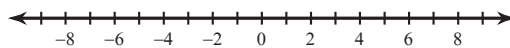
19) $12n + 12 < -24$ or $11 + 11n < 55$



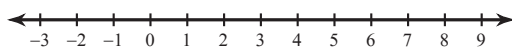
20) $-41 < 7r + 8 \leq -55$



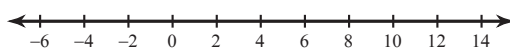
21) $-4p - 11 \geq -39$ and $-7p + 4 \leq 53$



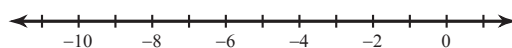
22) $-18 < 2 - 4x < -2$



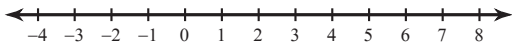
23) $-109 < 11 - 10a < 41$



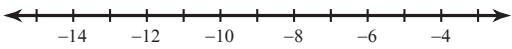
24) $-12m - 2 < 118$ and $-10m + 11 > 51$



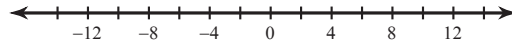
25) $-17 > 9x - 8 > -26$



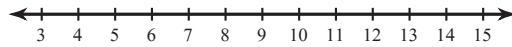
27) $12 + 11x \geq -76$ or $3x - 5 \geq -26$



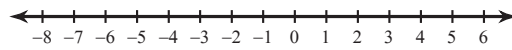
29) $-8r + 7 < -73$ or $r - 10 < -21$



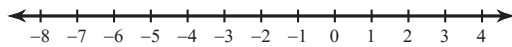
31) $-6a - 9 \leq -69$ or $7a + 9 < 58$



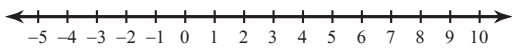
33) $9p - 3 > 15$ or $7 - 2p \geq 15$



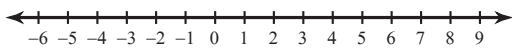
35) $10m + 7 \leq 27$ and $8 - 4m < 28$



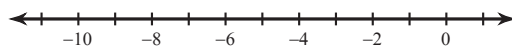
37) $11 - 10x \geq -79$ and $-12x + 4 \leq 28$



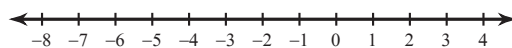
39) $7 + 11v > -37$ and $11v + 7 \leq 84$



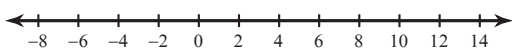
41) $12n + 7 \geq -89$ and $5n - 11 < -11$



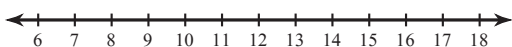
43) $11p - 8 \leq 25$ and $4p - 4 > -16$



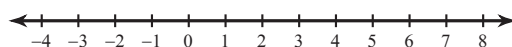
45) $4 - 8v > 28$ or $-5 - 7v \leq -68$



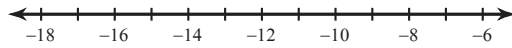
47) $-11x + 4 < -117$ and $9x - 3 > 69$



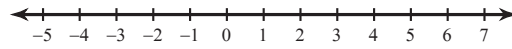
49) $9n + 2 < -70$ or $-11n + 1 \geq 1$



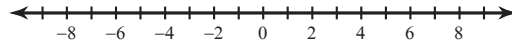
26) $-3x - 2 \leq 28$ or $7x - 4 > 45$



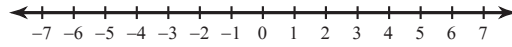
28) $-9 \leq 5 + 7m < -65$



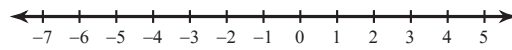
30) $7 - 10x < -33$ or $11x - 6 < -50$



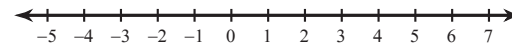
32) $47 < -2 + 7k < -2$



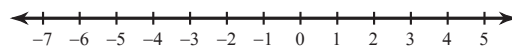
34) $7 + 2v > 11$ or $12v + 11 \leq -25$



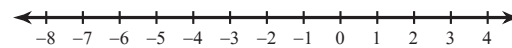
36) $8 - 8r \geq 0$ or $6 - 5r \leq -14$



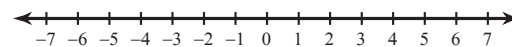
38) $12 < 10 - 2x \leq 14$



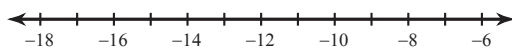
40) $6 + 6n > 6$ and $-10n - 4 < 116$



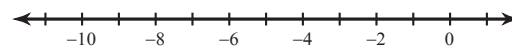
42) $b + 9 \leq 16$ or $-3 - 2b \leq 3$



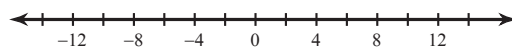
44) $-2x - 7 < -19$ or $2x - 8 > -30$



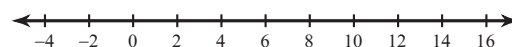
46) $6b + 9 \geq -27$ and $-7 - 11b \geq -7$



48) $3 - 12k \leq -117$ or $10k + 9 \leq -101$



50) $m - 5 \geq 7$ or $2 - 4m \geq 2$

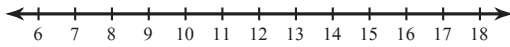


Assignment

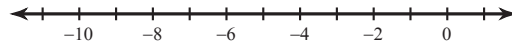
© 2013 Kuta Software LLC. All rights reserved.

Solve each compound inequality and graph its solution.

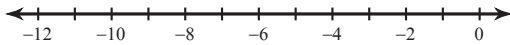
1) $4 - 12v \leq -128$ and $5v + 7 \geq 57$



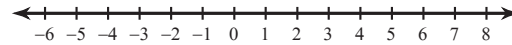
2) $11 - 4n \leq 39$ or $7n + 11 \geq -31$



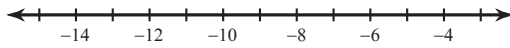
3) $11x + 9 > -46$ and $6x + 1 < -11$



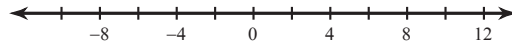
4) $3r - 6 > -30$ or $10 - r \geq -1$



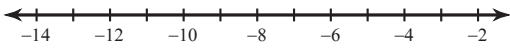
5) $-7 + 12m < -115$ and $-7m + 8 < 78$



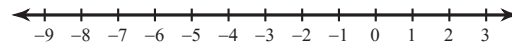
6) $-48 \leq 7 - 5n \leq 57$



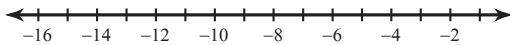
7) $-11x - 1 < 98$ or $2x - 8 \geq -8$



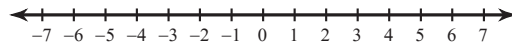
8) $4 - 2b < 14$ and $3b + 11 \leq 14$



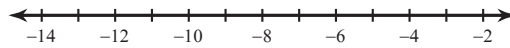
9) $4 + 3x < -32$ or $x - 8 \geq -13$



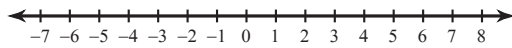
10) $-7 \leq 8 - 3n < 20$



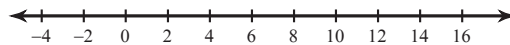
11) $5p + 9 \leq -36$ or $3p + 8 \geq -13$



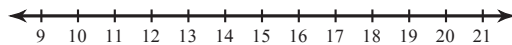
12) $9 - 5x < -11$ or $7x - 10 < -31$



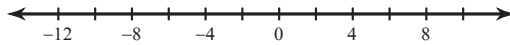
13) $-7 - 6a \leq -79$ or $7a + 8 < 8$



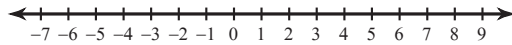
14) $10k + 8 < 128$ or $k + 1 \leq 9$



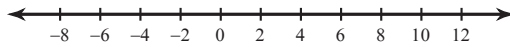
15) $-48 < 2 + 5p \leq 52$



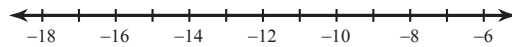
16) $2 + 10x < -28$ or $3x - 1 > 11$



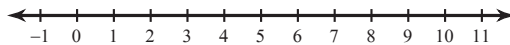
17) $-85 \leq 5 - 9b \leq 59$



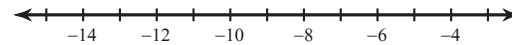
18) $8a - 1 > 23$ or $-6 + 4a \geq -42$



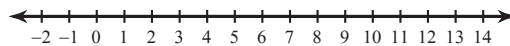
19) $12 - 10n \leq -78$ or $7n - 3 > 46$



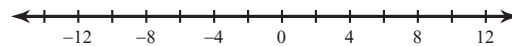
20) $12 - 11p \geq 89$ and $10 + p < 7$



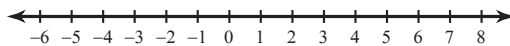
21) $11n - 8 \geq 113$ or $-n - 4 > -5$



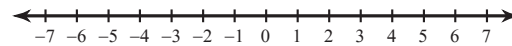
22) $4 + 4n \geq 36$ or $n + 6 < -5$



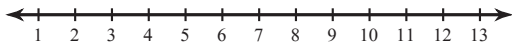
23) $-5 \leq 3 + 2b < 17$



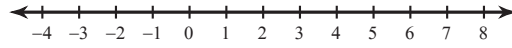
24) $7r + 12 \geq 33$ or $-3 - 7r \geq 18$



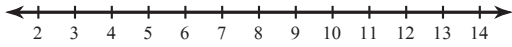
25) $6 - 7x > -43$ and $9x - 7 \geq 29$



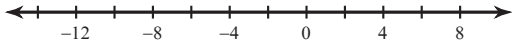
27) $5 + 8n \geq 29$ and $4 - 10n < 74$



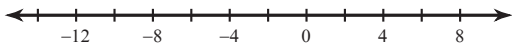
29) $8x + 1 \leq 57$ or $-7x - 4 \leq -60$



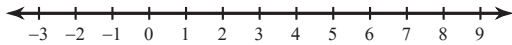
31) $-7v - 2 \leq -30$ or $12v + 10 \leq -110$



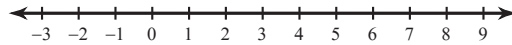
33) $9x - 12 \leq -102$ or $-x - 8 < -13$



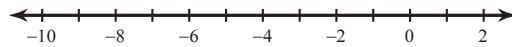
35) $11v - 3 > 8$ and $4 + 9v \leq 31$



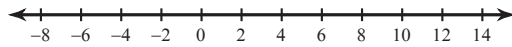
37) $11 + 10a < 61$ and $5a - 10 > -10$



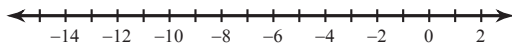
39) $7 + 7n \geq 0$ or $11 + 10n < -19$



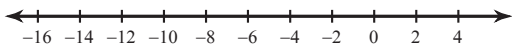
41) $-9 + b \leq -12$ or $-6b + 11 \leq -55$



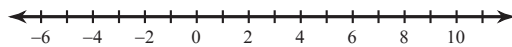
43) $-2m + 10 > 8$ and $2m + 7 > -17$



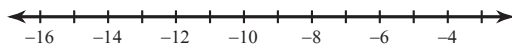
45) $-9k + 5 \geq 104$ or $-11 - 4k \leq -11$



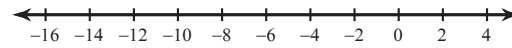
47) $7 \leq 10 + r < 19$



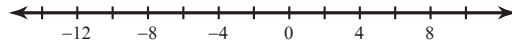
49) $6m - 9 < -75$ or $2 - 5m \leq 37$



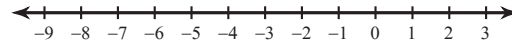
26) $9b + 4 < -104$ or $-1 - 9b < -10$



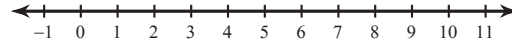
28) $-9 - 9x < -63$ or $5 + 5x \leq -45$



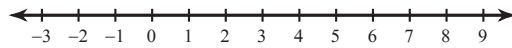
30) $4m + 1 < 5$ or $5m + 5 \leq -10$



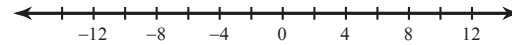
32) $-63 \leq -9r + 9 \leq -18$



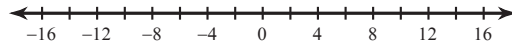
34) $-63 \leq -9k - 9 < -45$



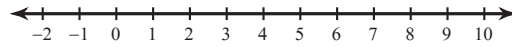
36) $7n - 8 < -78$ or $2n - 8 \geq 12$



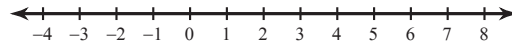
38) $x - 2 < -14$ or $-11x + 7 \leq -125$



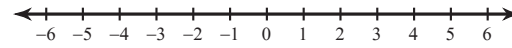
40) $-9x + 2 \leq 11$ and $11x + 4 \leq 103$



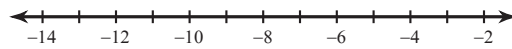
42) $24 \leq 6 - 2x \leq 20$



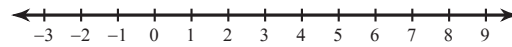
44) $9n - 6 \leq 3$ and $-7 - 11n \leq 37$



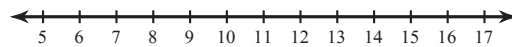
46) $9x - 6 < -87$ or $-6x + 11 \leq 47$



48) $-18 \leq 10n - 8 \leq 2$



50) $35 < 5 + 3x \leq 38$

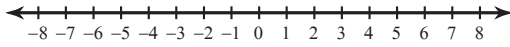


Assignment

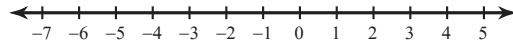
© 2013 Kuta Software LLC. All rights reserved.

Solve each compound inequality and graph its solution.

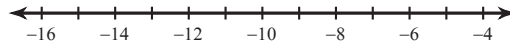
1) $107 \leq 12x + 11 < -61$



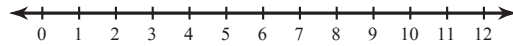
2) $21 < 10b + 1 \leq -9$



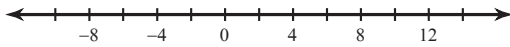
3) $-8 - 9b < 73$ or $4b - 1 \leq -49$



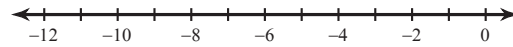
4) $3 - m < 2$ and $11 - 11m \geq -88$



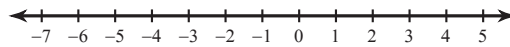
5) $-102 \leq 11x - 3 < 129$



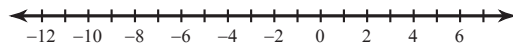
6) $5 - n < 14$ and $-2 - 2n \geq 10$



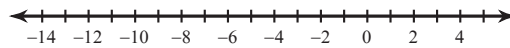
7) $-3a - 1 < -4$ or $7 - 7a > 21$



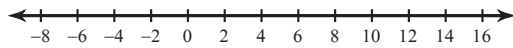
8) $-97 < -9 + 8p \leq 39$



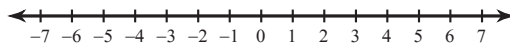
9) $11 + 9n \geq 20$ or $11 + 9n < -70$



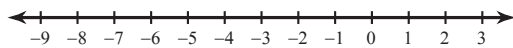
10) $x - 2 \leq -7$ or $x - 5 \geq 7$



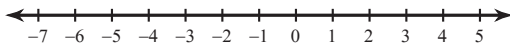
11) $65 \leq 11 + 6n \leq 53$



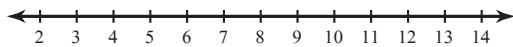
12) $10v + 7 \geq -23$ and $9 + 3v < 6$



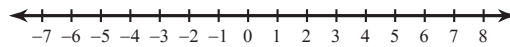
13) $17 < 11k - 5 < -16$



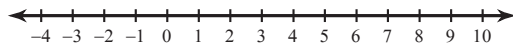
14) $-10x + 12 \geq -68$ or $5 - 3x \leq -22$



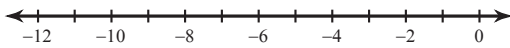
15) $8n - 5 < -21$ or $9 + 6n > 39$



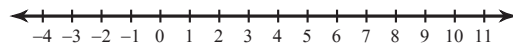
16) $4x + 7 \leq 39$ and $7 - 9x < 25$



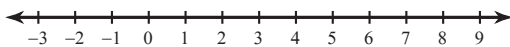
17) $-14 < 4 + 3x \leq -11$



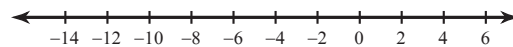
18) $8 \leq 4b + 12 < 44$



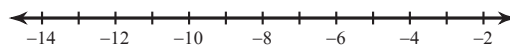
19) $-14 \leq 7k - 7 < 49$



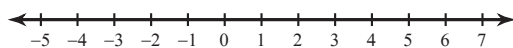
20) $2 + 2a < -22$ or $6a + 3 > 15$



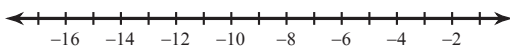
21) $8 - 3n \geq 17$ and $2n - 12 \geq -24$



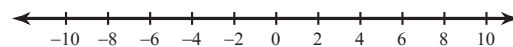
22) $10 + 11k \geq 43$ or $10k + 6 < -14$



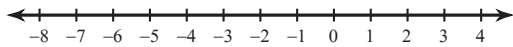
23) $11x - 3 \geq -58$ or $2x + 7 \leq -17$



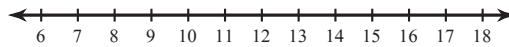
24) $-12 - 10r \geq 48$ or $2 - 2r \leq -8$



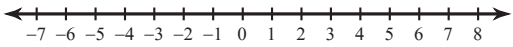
25) $10a - 8 > -18$ and $-2 - 12a \geq 58$



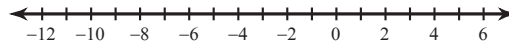
26) $2v + 2 \leq 26$ and $9 + 5v \geq 64$



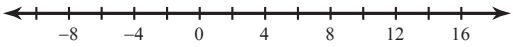
27) $v + 8 \geq -1$ or $8 - 5v \geq 38$



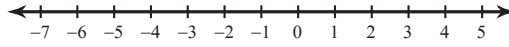
28) $4 - 4m \leq -8$ or $-4m - 3 \geq 33$



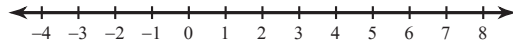
29) $-10v + 3 > 73$ or $10 - 12v \leq -134$



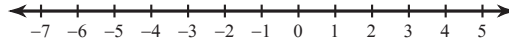
30) $-21 \leq 9 + 5x \leq 19$



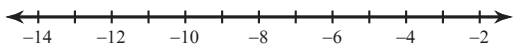
31) $4n - 3 < -7$ and $4n + 12 \leq 40$



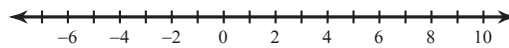
32) $109 \leq 11x - 1 \leq 98$



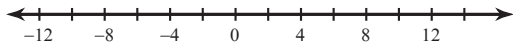
33) $4 + 6m \leq -56$ or $m + 8 > 3$



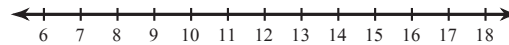
34) $-26 < -2a - 8 < 2$



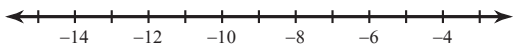
35) $3 + 5p < -32$ or $-6p + 7 \leq -65$



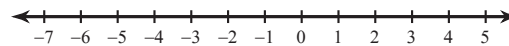
36) $-12n + 5 < -115$ or $6n - 8 \leq 46$



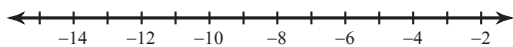
37) $-6x - 3 > 63$ and $10x - 2 \leq 108$



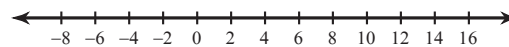
38) $3a + 12 > -3$ and $4a + 9 < 21$



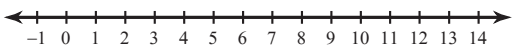
39) $6 + 12n < -138$ or $-3n - 5 < 10$



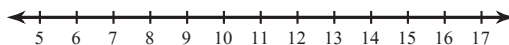
40) $6n + 2 > 74$ or $1 + 12n < -71$



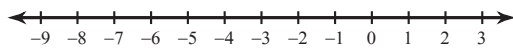
41) $5x - 10 \geq 45$ or $9 + 8x < 25$



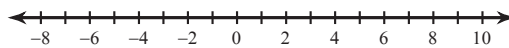
42) $-6 - 7x > -90$ and $12 - 6x \leq -42$



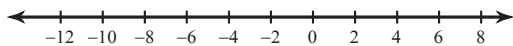
43) $2r - 7 < -23$ or $-11r + 3 > 58$



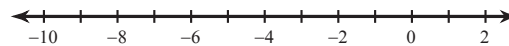
44) $11 + 8x < -21$ or $x + 11 > 16$



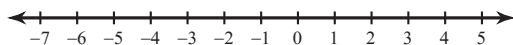
45) $p - 10 > -5$ or $5p - 8 \leq -53$



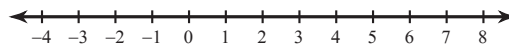
46) $4b - 11 < -55$ or $-12b + 7 \geq 79$



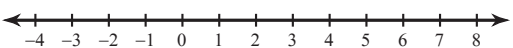
47) $-8 + 6r \leq -74$ or $9r + 9 > -99$



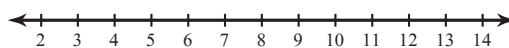
48) $-41 \leq 7 - 12n \leq -53$



49) $7x - 3 > 60$ or $9x - 5 > 13$



50) $8x + 11 < 91$ and $5x - 5 > 30$

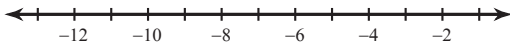


Assignment

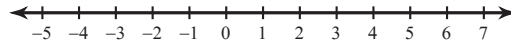
© 2013 Kuta Software LLC. All rights reserved.

Solve each compound inequality and graph its solution.

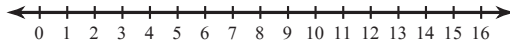
1) $9m + 6 \leq -39$ and $-12m + 10 < 130$



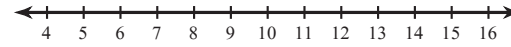
2) $8 - 4x \geq 4$ and $-10x - 11 \leq -11$



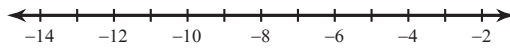
3) $5n + 7 > 67$ or $-8n - 9 \geq -33$



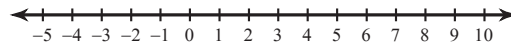
4) $9 + 2r < 25$ or $-6r + 8 \leq -52$



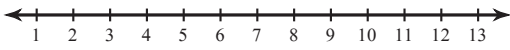
5) $-11 + 5r > -36$ or $9 + 7r \leq -61$



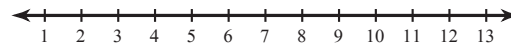
6) $2x + 9 \leq 5$ or $8 - 2x \leq -4$



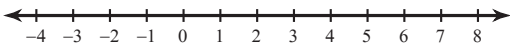
7) $11 - 3x \geq -4$ or $2x + 6 \geq 24$



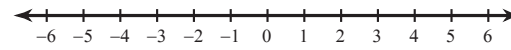
8) $79 > 11p - 9 > 13$



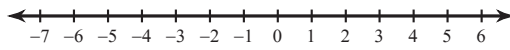
9) $-7 < 7 - 7x \leq 21$



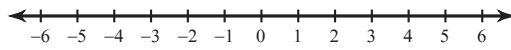
10) $8 - 3n < 8$ or $9 + 5n < 4$



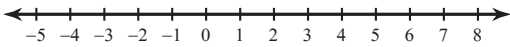
11) $10b - 6 > -116$ or $9b + 4 \leq 31$



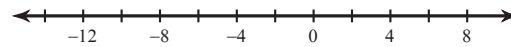
12) $10 + 11x \geq -12$ or $-8x + 10 < 18$



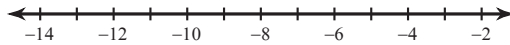
13) $69 \leq 10v - 1 < -101$



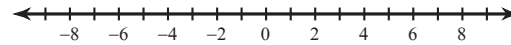
14) $-49 \leq 4r - 5 < 19$



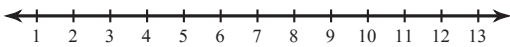
15) $1 - 5p \leq 31$ or $5 + 2p < -17$



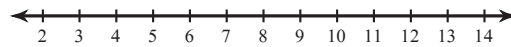
16) $-3 + 11n > -80$ and $-n + 10 > 2$



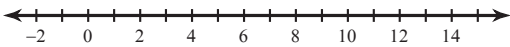
17) $37 \leq 10x + 7 < 107$



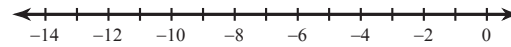
18) $-2 + 4x < 34$ or $3 + 4x \geq 43$



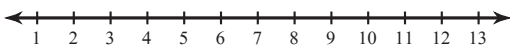
19) $7 - 11x \leq -103$ or $5 - 4x \geq -7$



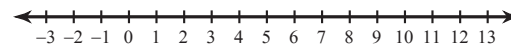
20) $6a - 6 \geq -72$ and $-11 + 6a \leq -29$



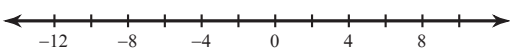
21) $8k - 2 \leq 38$ or $12k - 4 \geq 116$



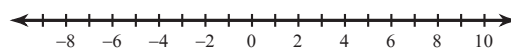
22) $8p - 4 \leq 92$ and $-3p + 6 \leq 9$



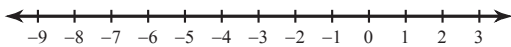
23) $-1 + 11x < 87$ and $12 + 3x > -24$



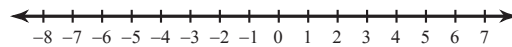
24) $5k - 5 \leq -35$ or $11k + 11 \geq 77$



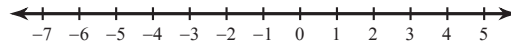
25) $10x - 1 \geq -31$ or $12x + 6 \geq 90$



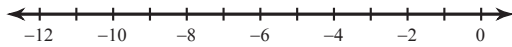
26) $-4n - 7 < 41$ or $9 - 4n > 29$



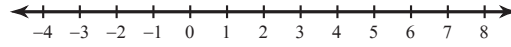
27) $-8 + 7p > -85$ or $10p + 10 < 20$



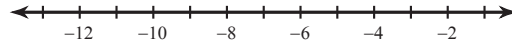
28) $23 < -4k + 3 < 47$



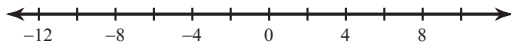
29) $7n + 1 \leq -6$ or $5 - n \geq 9$



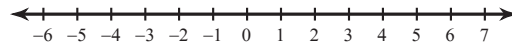
30) $a + 4 \leq -6$ or $6a - 5 > -29$



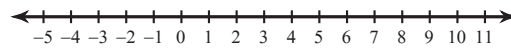
31) $-8x + 7 \leq -49$ or $-4 - 7x > 52$



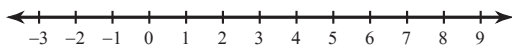
32) $7b - 9 \geq 5$ or $-10b - 7 > 3$



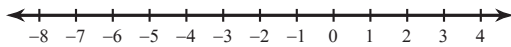
33) $8n + 11 \leq 3$ or $11 + n \geq 18$



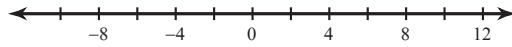
34) $-6v - 12 > -42$ or $10v + 5 < -75$



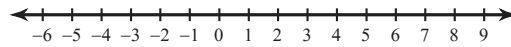
35) $-4x - 5 < -5$ or $6x + 12 < 12$



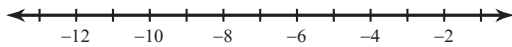
36) $6 + m \leq 15$ and $12 + 6m \geq -36$



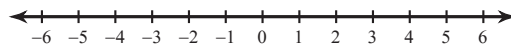
37) $11 + 12n \leq -1$ or $2 - 11n \leq -64$



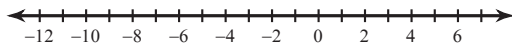
38) $12k - 2 < -98$ or $-2 - 10k < 38$



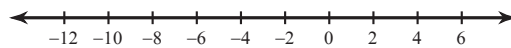
39) $-2 - 11n \leq -13$ or $-7 + 6n \leq -13$



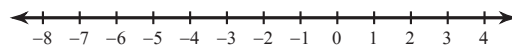
40) $-9 - 4v \leq 27$ and $10v + 6 \leq 46$



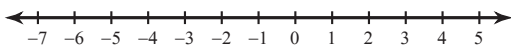
41) $-4a + 1 \leq -11$ or $4 + 10a < -76$



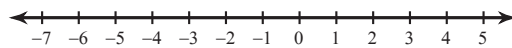
42) $9n - 10 < -100$ or $-12n - 6 > 42$



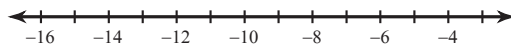
43) $3x + 7 > -5$ or $10 + 6x \geq 46$



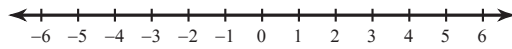
44) $-9 + 4n > -17$ and $-11n + 7 \geq -37$



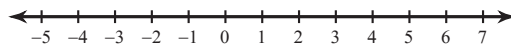
45) $7 + 8m \geq -57$ or $m + 7 < -4$



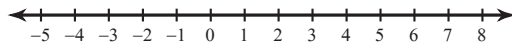
46) $62 < -7b + 6 < 27$



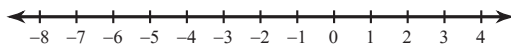
47) $4 < 3n + 10 < 13$



48) $-12 \leq -2p + 2 \leq 10$



49) $54 \geq 9 - 9x > 45$



50) $-75 < 12x - 3 \leq 141$

